





Use the array provided to solve each problem.


1) $30 \times 34 =$




2) $24 \times 20 =$




3) $20 \times 28 =$




4) $22 \times 20 =$



5) $20 \times 22 =$



6) $26 \times 20 =$



Answers

1. _____

2. _____

3. _____

4. _____

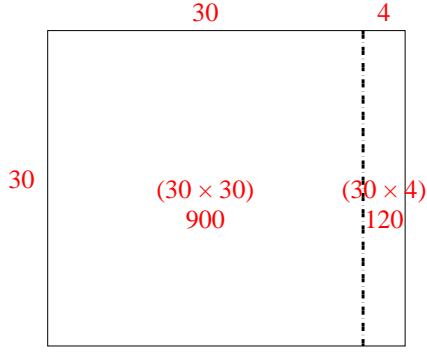
5. _____

6. _____

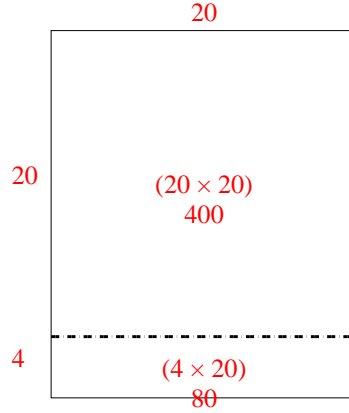


Use the array provided to solve each problem.

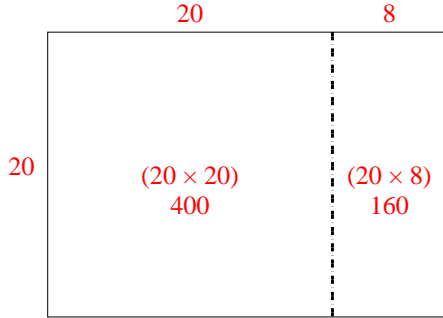
1) $30 \times 34 =$



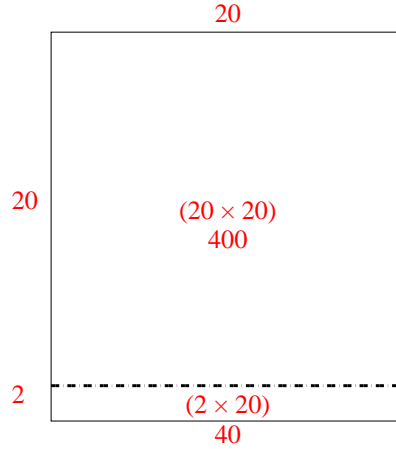
2) $24 \times 20 =$



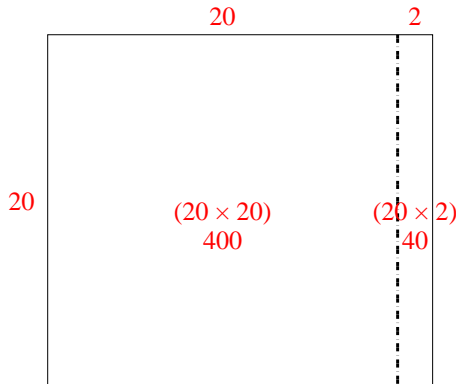
3) $20 \times 28 =$



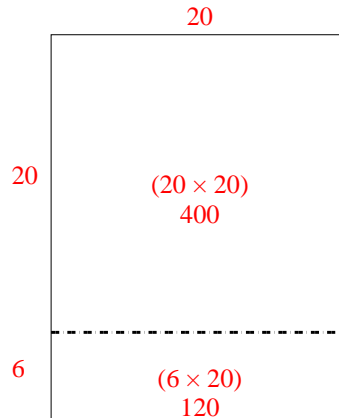
4) $22 \times 20 =$



5) $20 \times 22 =$



6) $26 \times 20 =$



Answers

1. 1,020
2. 480
3. 560
4. 440
5. 440
6. 520